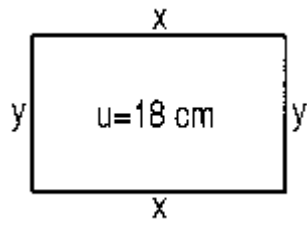
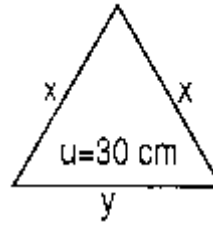


Gleichungen mit zwei Variablen aus geometrischen Figuren aufstellen

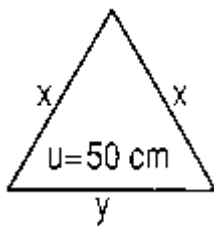
a)



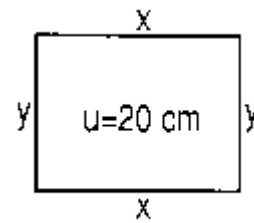
b)



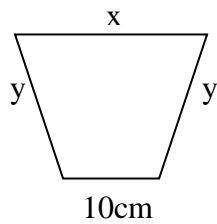
c)



d)



e)



$$u = 46\text{ cm}$$